

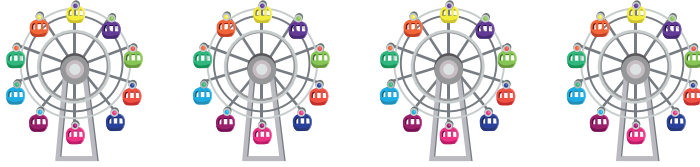


NAME _____ DATE _____


COUNTING OBJECTS (BY TENS AND ONES)

Count the number of objects in each group and then fill in the number bond and place value chart. Complete the number sentences by adding the tens and ones.

1)



$4 \times 10 = 40$

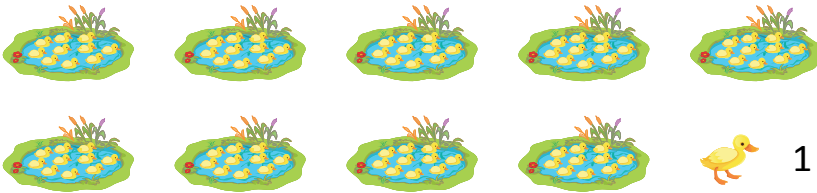
 $1 \times 1 = 1$

$\underline{\quad} + \underline{\quad} = \underline{\quad}$


$\underline{\quad}$ tens + $\underline{\quad}$ one = $\underline{\quad}$.

Tens	Ones

2)



$9 \times 10 = 90$

 $1 \times 1 = 1$

$\underline{\quad} + \underline{\quad} = \underline{\quad}$


$\underline{\quad}$ tens + $\underline{\quad}$ one = $\underline{\quad}$.

Tens	Ones

3)

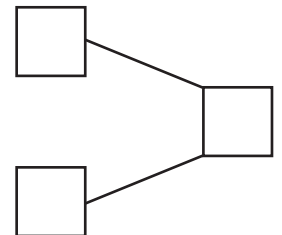


$9 \times 10 = 90$

 $2 \times 1 = 2$

$\underline{\quad} + \underline{\quad} = \underline{\quad}$


$\underline{\quad}$ tens + $\underline{\quad}$ ones = $\underline{\quad}$.



4)



$9 \times 10 = 90$

 $6 \times 1 = 6$

$\underline{\quad} + \underline{\quad} = \underline{\quad}$

$\underline{\quad}$ tens + $\underline{\quad}$ ones = $\underline{\quad}$.

Tens	Ones